



Choose a challenge to solve –
Can you solve more than one?

Challenge #3

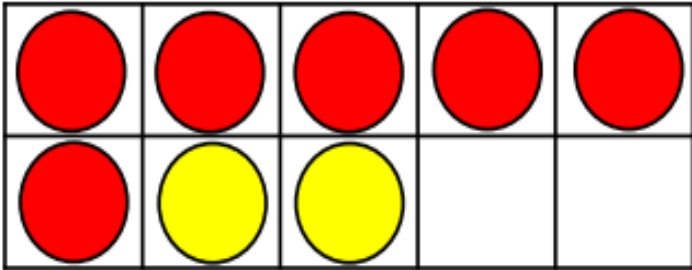
Fill in the gaps:

$$5 + 5 = 6 + \underline{\hspace{2cm}}$$

$$8 - 2 = 9 - \underline{\hspace{2cm}}$$

Challenge #1

Complete the number sentence.


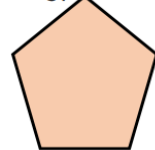


$$8 = \underline{\hspace{2cm}} + 2$$

Can you write a subtraction using the counters on the tens frame to help you?

Challenge #2 Shapes

Write 3-D or 2-D to show what type it is.



Can you name these?

Creative Challenge

Use this heart with a line of symmetry to create patterns that mirror each other on each side.

